



Cambridge IGCSE™

CO-ORDINATED SCIENCES

0654/21

Paper 2 Multiple Choice (Extended)

October/November 2023

45 minutes

You must answer on the multiple choice answer sheet.

You will need: Multiple choice answer sheet
Soft clean eraser
Soft pencil (type B or HB is recommended)

INSTRUCTIONS

- There are **forty** questions on this paper. Answer **all** questions.
- For each question there are four possible answers **A**, **B**, **C** and **D**. Choose the **one** you consider correct and record your choice in soft pencil on the multiple choice answer sheet.
- Follow the instructions on the multiple choice answer sheet.
- Write in soft pencil.
- Write your name, centre number and candidate number on the multiple choice answer sheet in the spaces provided unless this has been done for you.
- Do **not** use correction fluid.
- Do **not** write on any bar codes.
- You may use a calculator.

INFORMATION

- The total mark for this paper is 40.
- Each correct answer will score one mark.
- Any rough working should be done on this question paper.
- The Periodic Table is printed in the question paper.

This document has **16** pages.

1 Which characteristic of a living organism releases energy for growth?

- A excretion
- B reproduction
- C respiration
- D sensitivity

2 When a plant cell is put into a solution that has a lower water potential than the cell, the cytoplasm can pull away from the cell wall.

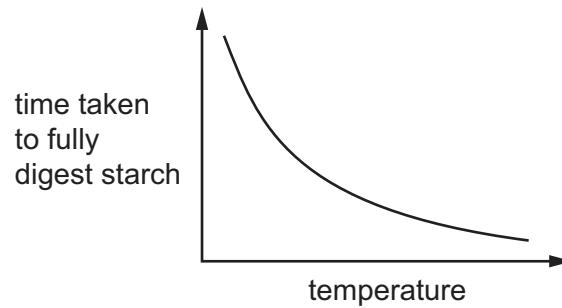
What is the term for this?

- A flaccid
- B plasmolysis
- C turgid
- D turgor pressure

3 Which colour does Benedict's solution change to when heated with a reducing sugar?

- A blue
- B blue-black
- C orange
- D purple

- 4 The graph shows the effect of increasing temperature on the time taken for amylase to fully digest a sample of starch.



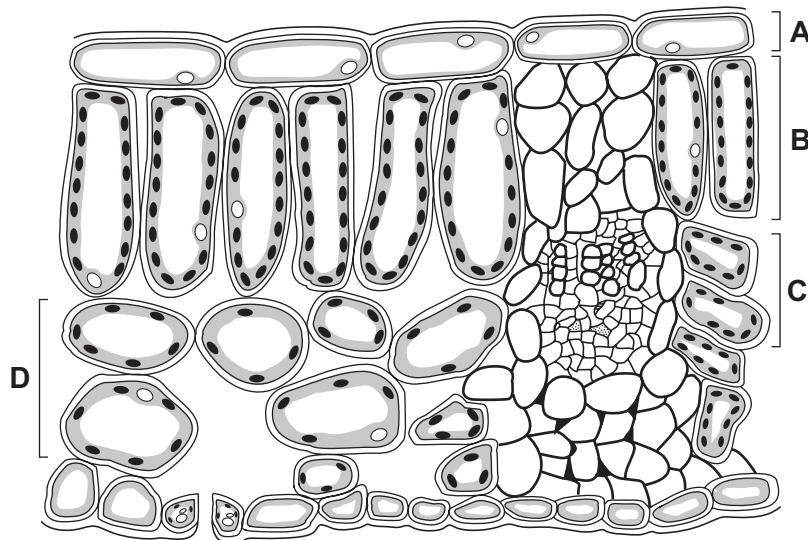
Which statements are correct?

- 1 As the temperature increases, the kinetic energy of the amylase and starch molecules increases.
- 2 The time taken to fully digest the starch decreases as temperature increases because there are more frequent collisions between starch and amylase molecules.
- 3 The time taken to fully digest the starch decreases as temperature increases because the shape of the amylase changes as it denatures.

A 1, 2 and 3 **B** 1 and 2 only **C** 1 and 3 only **D** 2 and 3 only

- 5 The diagram shows a cross-section through a leaf.

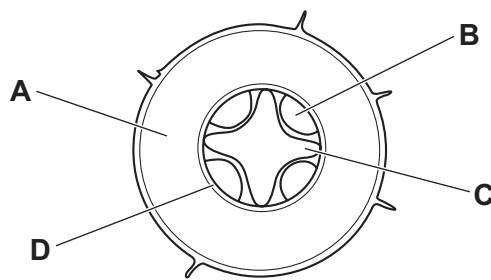
Which tissue is adapted for gas exchange?



- 6 Pancreatic insufficiency is a condition that occurs when the pancreas is unable to produce enough enzymes.

Which secretions are reduced due to this condition?

- A amylase, lipase and protease
 B amylase, lipase and bile
 C amylase, insulin and protease
 D glucagon, insulin and protease
- 7 Which label shows the position of the xylem in the cross-section of the root of a dicotyledonous plant?



- 8 Aerobic respiration releases energy from nutrient molecules.

One molecule of glucose requires1..... molecules of oxygen. The reaction releases2..... molecules of carbon dioxide and3..... molecules of water.

Which row completes gaps 1, 2 and 3?

	1	2	3
A	six	two	two
B	two	six	six
C	two	two	two
D	six	six	six

- 9 During an experiment, auxin is applied to one side of a shoot just behind the tip.

What will this stimulate?

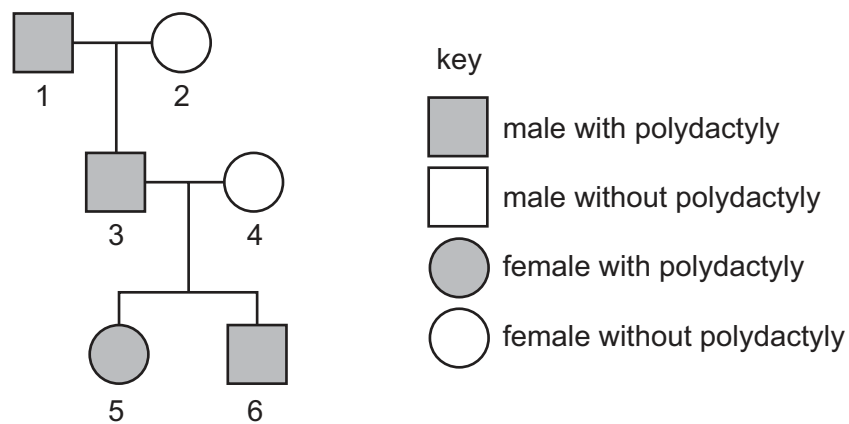
- A decreased cell elongation in all cells
 B decreased cell elongation on the side with extra auxin
 C increased cell elongation in all cells
 D increased cell elongation on the side with extra auxin

10 Which part of the male reproductive system is correctly matched to its function?

	part	function
A	prostate gland	transfers sperm to the urethra
B	scrotum	holds the testes outside of body
C	testes	secrete fluids for sperm to swim in
D	urethra	transfers semen to ovary

11 Cats with polydactyly have an extra digit on their paw. The allele for polydactyly, P, is dominant to the allele for having five digits, p.

The pedigree diagram shows a family of cats where polydactyly is present.



What is the probability that the next kitten from the mating of 3 and 4 has five digits?

- A** 0.00 **B** 0.25 **C** 0.50 **D** 0.75

12 Four processes that occur in mammals are listed.

- 1 muscle contraction
- 2 cell division
- 3 excretion
- 4 maintenance of a constant body temperature

Which processes reduce the amount of energy available to the next trophic level?

- A** 1, 2, 3 and 4
B 1 and 2 only
C 1, 3 and 4 only
D 4 only

- 13** Forests are cut down and burnt in deforestation programmes.

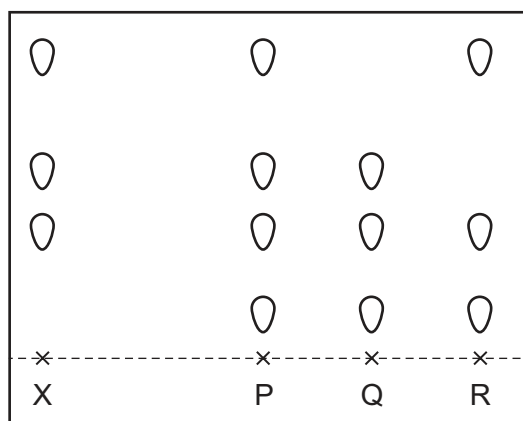
As a result of this, which gas in the atmosphere increases in concentration?

- A** carbon dioxide
- B** hydrogen
- C** nitrogen
- D** oxygen

- 14** Dye X is a mixture of different coloured substances.

Chromatography is used to compare X with three other mixtures, P, Q and R.

The results are shown.



Which mixtures contain dye X?

- A** P, Q and R
- B** P and Q only
- C** P only
- D** R only

- 15** What do the chemical symbols N_2 and Ni represent?

	N_2	Ni
A	a compound	a compound
B	a compound	an element
C	an element	a compound
D	an element	an element

- 16 The nucleon number of a hydrogen atom is 1.

What is present inside the nucleus of this atom?

- A one proton and one electron
- B one proton and one neutron
- C one proton only
- D one neutron only

- 17 When magnesium carbonate reacts with dilute hydrochloric acid, carbon dioxide gas is released.

The equation for this reaction is shown.



Which volume of carbon dioxide, collected at room temperature and pressure, is released when 4.2g of magnesium carbonate reacts with excess dilute hydrochloric acid?

- A 1.2 dm³ B 2.4 dm³ C 4.8 dm³ D 12 dm³

- 18 The temperature of solution Q is 21 °C. The temperature of solution P is 24 °C.

The two solutions are mixed. The temperature of the mixture is 31 °C.

Which statement is correct?

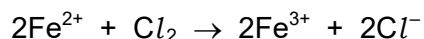
- A An endothermic reaction occurs and the reacting chemicals gain energy.
- B An endothermic reaction occurs and the reacting chemicals lose energy.
- C An exothermic reaction occurs and the reacting chemicals gain energy.
- D An exothermic reaction occurs and the reacting chemicals lose energy.

- 19 The rate of reaction between calcium carbonate and dilute hydrochloric acid is determined either by measuring the change in gas volume per unit time or by measuring the change in mass per unit time.

Which piece of apparatus must be used for **both** methods?

- A a balance
- B a gas syringe
- C a stop-clock
- D a thermometer

- 20 The ionic equation for the reaction between iron(II) chloride and chlorine is shown.



Which row shows the substance that is reduced and the oxidising agent?

	substance reduced	oxidising agent
A	Cl_2	Cl_2
B	Cl_2	Fe^{2+}
C	Fe^{2+}	Cl_2
D	Fe^{2+}	Fe^{2+}

- 21 Substance X is mixed with aqueous sodium hydroxide.

A green precipitate is produced.

Which metal ion is present in X?

- A** Cu^{2+} **B** Fe^{2+} **C** Fe^{3+} **D** Zn^{2+}

- 22 Potassium is in Group I of the Periodic Table.

Which statement about potassium is correct?

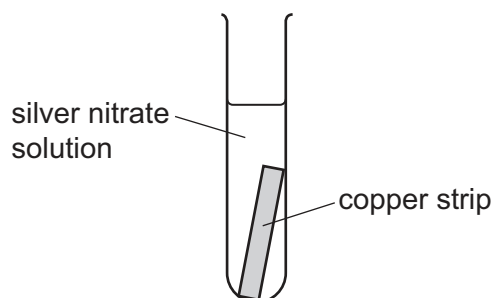
- A** It is a relatively hard metal.
B It is less dense than lithium.
C It has a higher melting point than sodium.
D It reacts more vigorously with water than sodium.

- 23 What is a use for argon?

- A** as a catalyst
B in alloys
C in lamps
D neutralising chemical waste

- 24** Silver oxide is reduced by heating with carbon more easily than copper oxide is reduced by heating with carbon.

A copper strip is placed into a solution of silver nitrate as shown.



Which row describes the reaction?

	the colourless solution slowly turns blue	the copper strip slowly dissolves	a silver-grey metal is formed
A	x	x	x
B	✓	✓	✓
C	✓	x	✓
D	x	✓	x

- 25** Catalytic converters are fitted to cars to remove some gases from exhaust emissions.

Which gases are released by catalytic converters?

- A** carbon dioxide and nitrogen
- B** carbon dioxide and nitrogen monoxide
- C** carbon monoxide and nitrogen
- D** carbon monoxide and nitrogen monoxide

- 26** Sulfuric acid is manufactured by the Contact process.

One of the reactions in this process converts sulfur dioxide to sulfur trioxide.

Which statements about the conditions for this reaction are correct?

- 1 A nickel catalyst is used.
- 2 A pressure of about 1–2 atmospheres is used.
- 3 A temperature of about 450 °C is used.

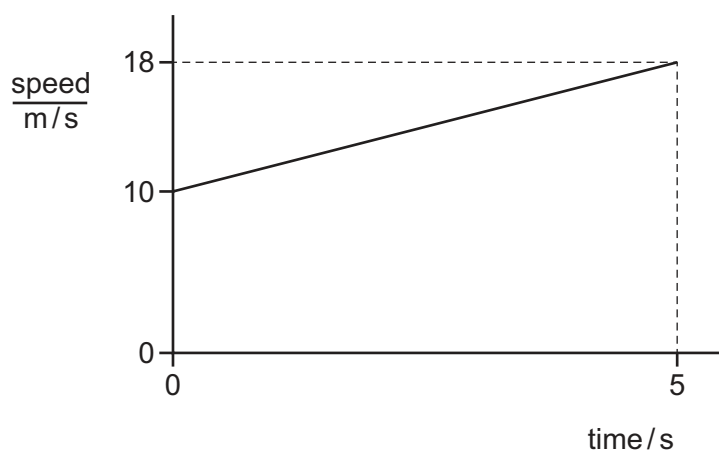
- A** 1, 2 and 3 **B** 1 and 2 only **C** 1 and 3 only **D** 2 and 3 only

27 Which statements about monomers and polymers are correct?

- 1 Different polymers can have different linkages between monomers.
- 2 An addition polymerisation reaction produces more than one type of polymer.
- 3 Addition polymers are made from saturated monomer molecules.
- 4 Nylon is a condensation polymer formed from two different monomers.

A 1 and 2 **B** 1 and 4 **C** 2 and 3 **D** 3 and 4

28 The speed–time graph represents part of a car journey.



How far does the car travel in the part of the journey shown?

A 20 m **B** 45 m **C** 70 m **D** 90 m

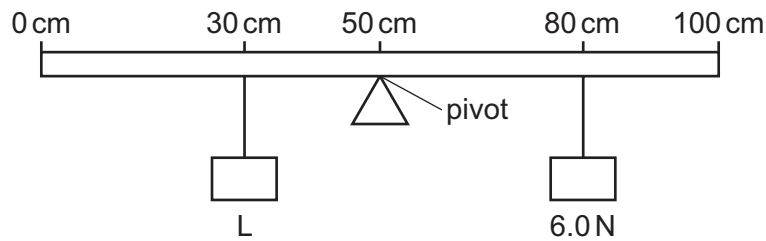
29 A rocket has a mass of 300 kg. Its motors produce a force of 12 000 N vertically upwards.

The acceleration of free fall g is 10 m/s^2 .

What is the resultant force on the rocket and what is the acceleration of the rocket?

	resultant force / N	<u>acceleration</u> m/s^2
A	9 000	30
B	9 000	2.7×10^6
C	15 000	50
D	15 000	4.5×10^6

- 30** A uniform metre rule rests on a pivot at the 50 cm mark. A load L is placed at the 30 cm mark and a load of 6.0 N is placed at the 80 cm mark. The arrangement is balanced.



What is the weight of load L ?

- A** 6.0 N **B** 9.0 N **C** 16 N **D** 24 N
- 31** A hydroelectric energy storage scheme stores energy by pumping water up a mountain into a lake behind a dam.

In 1.0 s, 10 000 kg of water is pumped into the lake and gains a height of 150 m. The efficiency of this process is 60%.

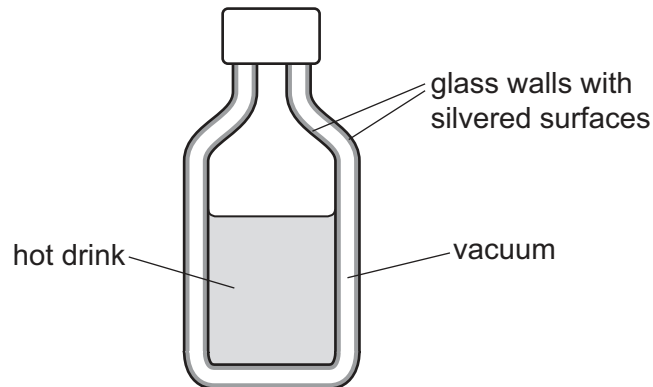
Gravitational field strength = 10 N/kg.

What is the energy input in 1.0 s?

- A** $9.0 \times 10^5 \text{ J}$ **B** $2.5 \times 10^6 \text{ J}$ **C** $9.0 \times 10^6 \text{ J}$ **D** $2.5 \times 10^7 \text{ J}$
- 32** What is a thermocouple used to measure?

- A** expansion
B pressure
C resistance
D temperature

- 33 A vacuum flask uses a vacuum between two shiny surfaces to keep a drink hot for a long time.



How do the vacuum and the shiny surfaces help to keep the drink hot?

	vacuum	shiny surfaces
A	prevents conduction and convection	reduce conduction and radiation
B	prevents conduction and convection	reduce radiation only
C	prevents radiation	reduce conduction and convection
D	prevents radiation	reduce convection only

- 34 When light passes from air into glass its speed decreases but its frequency remains constant.

Light travelling in air enters a glass block at an angle of incidence that is greater than 0° .

Which row describes what happens to the direction and what happens to the wavelength of the light?

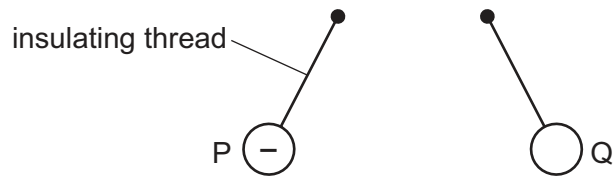
	direction	wavelength
A	moves away from the normal	decreases
B	moves away from the normal	increases
C	moves towards the normal	decreases
D	moves towards the normal	increases

- 35 Which change to a sound wave makes the sound louder?

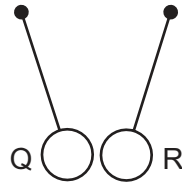
- A** decreasing the amplitude
- B** decreasing the wavelength
- C** increasing the amplitude
- D** increasing the wavelength

- 36** Three charged balls P, Q and R are suspended by insulating threads. Ball P is negatively charged.

Ball Q is brought close to ball P. The balls move away from each other.



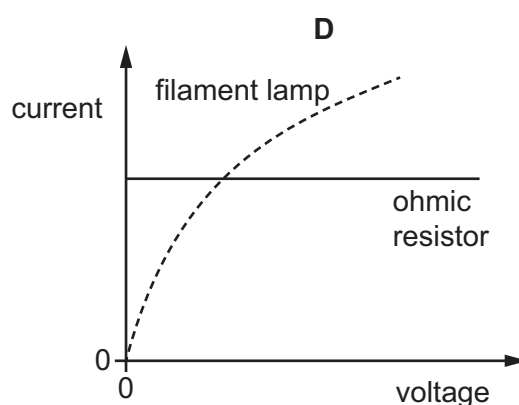
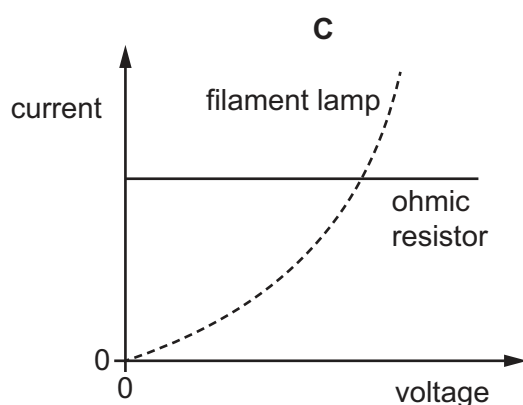
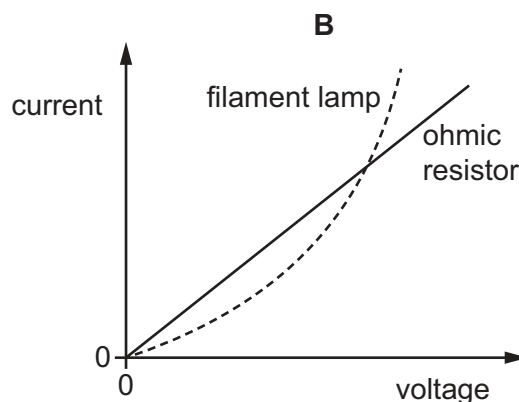
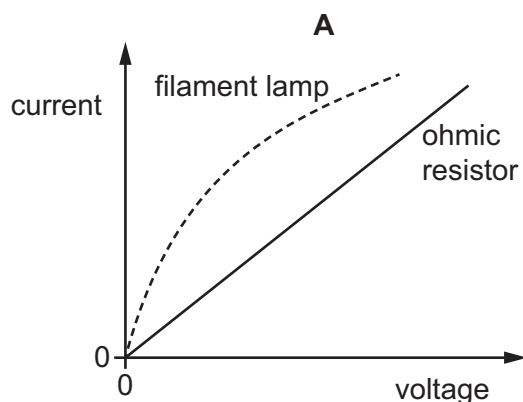
Ball Q is now brought close to ball R. The balls move closer to each other.



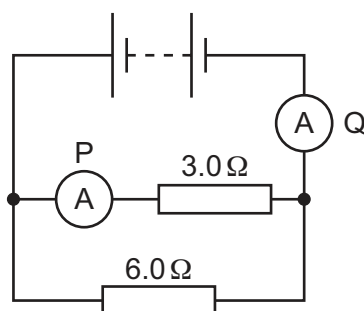
What are the signs of the charges on ball Q and ball R?

	ball Q	ball R
A	negative	negative
B	negative	positive
C	positive	negative
D	positive	positive

37 Which graph shows the current–voltage characteristics of an ohmic resistor and a filament lamp?



38 A battery is connected in a circuit to a $3.0\ \Omega$ resistor, a $6.0\ \Omega$ resistor and two ammeters P and Q.



What is the combined resistance of the two resistors and which ammeter has the greater reading?

	combined resistance / Ω	ammeter with greater reading
A	less than 3.0	P
B	less than 3.0	Q
C	9.0	P
D	9.0	Q

39 The current in an electric kettle used to boil water is 9.0 A.

What is the most appropriate rating of fuse to use with this kettle?

- A** 1 A **B** 3 A **C** 8 A **D** 13 A

40 Three types of ionising radiation enter a magnetic field at right angles to the field.

Which types of radiation are deflected?

- A** α and β only **B** α and γ only **C** β and γ only **D** α , β and γ

Permission to reproduce items where third-party owned material protected by copyright is included has been sought and cleared where possible. Every reasonable effort has been made by the publisher (UCLES) to trace copyright holders, but if any items requiring clearance have unwittingly been included, the publisher will be pleased to make amends at the earliest possible opportunity.

To avoid the issue of disclosure of answer-related information to candidates, all copyright acknowledgements are reproduced online in the Cambridge Assessment International Education Copyright Acknowledgements Booklet. This is produced for each series of examinations and is freely available to download at www.cambridgeinternational.org after the live examination series.

Cambridge Assessment International Education is part of Cambridge Assessment. Cambridge Assessment is the brand name of the University of Cambridge Local Examinations Syndicate (UCLES), which is a department of the University of Cambridge.

The Periodic Table of Elements

Group													
I	II	Key					III	IV	V	VI	VII	VIII	
		atomic number atomic symbol name relative atomic mass					1 H hydrogen 1						
3 Li lithium 7	4 Be beryllium 9											2 He helium 4	
11 Na sodium 23	12 Mg magnesium 24											9 F fluorine 19	
												8 O oxygen 16	
												7 N nitrogen 14	
												6 C carbon 12	
												5 B boron 11	
												13 Al aluminium 27	
												14 Si silicon 28	
												15 P phosphorus 31	
												16 S sulfur 32	
												17 Cl chlorine 35.5	
												18 Ar argon 40	
19 K potassium 39	20 Ca calcium 40						30 Zn zinc 65	32 Ge germanium 73	33 As arsenic 75	34 Se selenium 79	35 Br bromine 80	36 Kr krypton 84	
37 Rb rubidium 85	38 Sr strontium 88						48 Cd cadmium 112	50 Sn tin 119	51 Sb antimony 122	52 Te tellurium 128	53 I iodine 127	54 Xe xenon 131	
55 Cs caesium 133	56 Ba barium 137						80 Hg mercury 201	82 Pb lead 207	83 Bi bismuth 209	84 Po polonium —	85 At astatine —	86 Rn radon —	
87 Fr francium —	88 Ra radium —						112 Cn copernicium —	114 Fl flerovium —	115 Mc moscovium —	116 Lv livermorium —	117 Ts tennessine —	118 Og oganesson —	

lanthanoids	57	La	lanthanum	139	58	Ce	cerium	140	59	Pr	praseodymium	141	60	Nd	neodymium	144	61	Pm	promethium	—	62	Sm	samarium	150	63	Eu	euroium	152	64	Gd	gadolinium	157	65	Tb	terbium	159	66	Dy	dysprosium	163	67	Ho	holmium	165	68	Er	erbium	167	69	Tm	thulium	169	70	Yb	ytterbium	173	71	Lu	lutetium	175	
	actinoids	89	Ac	actinium	—	90	Th	thorium	232	91	Pa	protactinium	231	92	U	uranium	238	93	Np	neptunium	—	94	Pu	plutonium	—	95	Am	americium	—	96	Cm	curium	—	97	Bk	berkelium	—	98	Cf	californium	—	99	Es	einsteinium	—	100	Fm	femium	—	101	Md	merendelevium	—	102	No	nobelium	—	103	Lr	lawrencium	—

The volume of one mole of any gas is 24 dm^3 at room temperature and pressure (r.t.p.).